





Decimals


Type each of the following fractions as a decimal number in the relevant cloud.


(i) $\frac{9}{10} =$ 


(ii) $\frac{75}{100} =$ 


(iii) $\frac{9}{1000} =$ 


(iv) $\frac{25}{1000} =$ 


(v) $\frac{275}{1000} =$ 


(vi) $\frac{15}{100} =$ 

(vii) $\frac{375}{1000} =$ 

(viii) $\frac{3}{100} =$ 

(ix) $\frac{7}{100} =$ 

(x) $\frac{5}{10} =$ 

(xi) $\frac{7}{1000} =$ 

(xii) $\frac{75}{1000} =$ 