

## CHECK YOUR PROGRESS UNIT 1 STAGE 6 SCIENCE

NAME: \_\_\_\_\_

CLASS: \_\_\_\_\_

1. Match each organ in **Column A** with its main function in **Column B**.

A	B
heart	excretion
stomach and intestines	breathing
lungs	control
kidneys	digestion
brain	circulation

2. State whether each of the following statements is **TRUE** or **FALSE**.

- a) The heart pumps air around the body. \_\_\_\_\_
- b) Your heart beats faster when you exercise. \_\_\_\_\_
- c) Your pulse rate tells you how fast you are exercising.  
\_\_\_\_\_
- d) Blood moves around the body. In special tubes called blood vessels. \_\_\_\_\_
- e) The blood picks up carbon dioxide in the lungs. \_\_\_\_\_

## CHECK YOUR PROGRESS UNIT 1 STAGE 6 SCIENCE

3. Use the words in the box to complete the sentences.

mouth

stomach

intestines

gullet

A. Food is pushed down the ..... into the stomach.

B. In the ....., the food is broken down into very small particles.

C. The food is mixed with digestive juices in the .....

D. Undigested food is pushed out of the body through the end of the .....

E. The food is chewed in the ..... .

4. The sentences in 3 are in the wrong order. Sort them into the correct order of the stages of digestion.

1.

2.

3.

4.

5.

## CHECK YOUR PROGRESS UNIT 1 STAGE 6 SCIENCE

5.

A. Name the organs shown in the pictures.

A.

B.

C.

B. Which organ removes wastes and excess water from the body?

C. What is the waste from this organ called?

D. Which organ allows us to think, talk and move?

E. How does **B** make sure that **A** does its job?

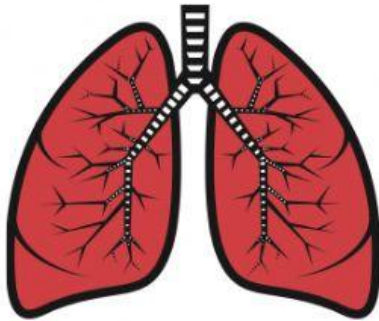
F. How does playing a game of soccer affect **A**'s function?

G. How is **A** protected from damage?

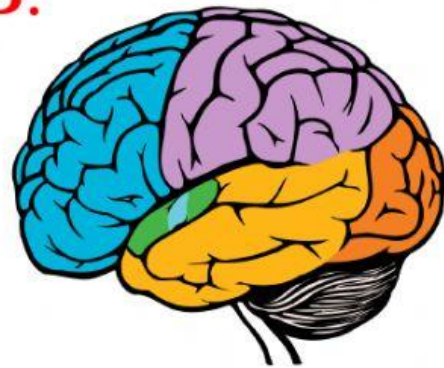
H. How is **B** protected from damage?

## CHECK YOUR PROGRESS UNIT 1 STAGE 6 SCIENCE

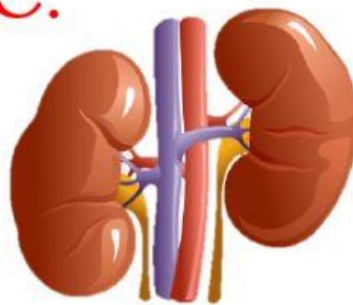
A.



B.



C.



6.

A. Name the waste gas that we breathe out of the lungs.

B. Name the gas we breathe into the lungs.