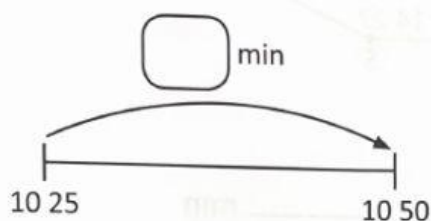


Practice 2 Duration

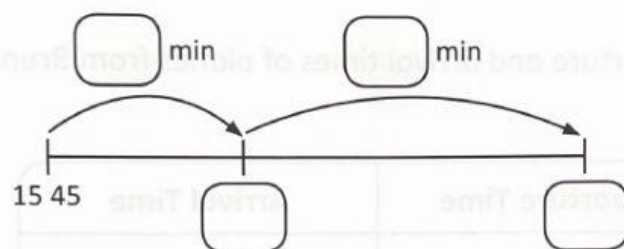
Name : _____

1. Liana called her friend at 10 25 and put down the phone at 10 50.
How long did Liana speak to her friend for?



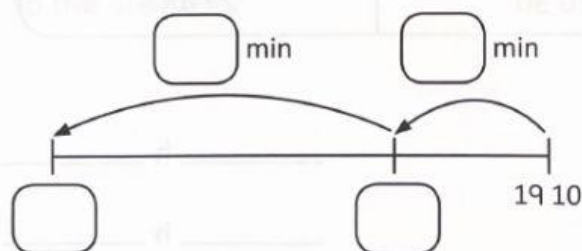
Liana spoke to her friend for _____ min.

2. Putri took a nap at 15 45. She woke up 40 minutes later.
At what time did Putri wake up?



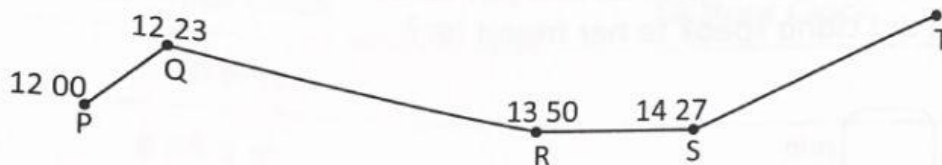
Putri woke up at _____.

3. Ishak spent 45 minutes at the park. He left the park at 19 10.
At what time did Ishak reach the park?



Ishak reached the park at _____.

- * 4. A bus left Station P at noon. It stopped at 3 other stations before arriving at Station T. The diagram below shows the times the bus arrived at each station.



- (a) The time the bus took to travel from:
- Station P to Station Q was _____ h _____ min
 - Station Q to Station R was _____ h _____ min
 - Station R to Station S was _____ h _____ min
- (b) The bus took 3 h 30 min to travel from Station P to Station T.
At what time did the bus arrive at Station T?

- * 5. The table below shows the departure and arrival times of planes from Brunei to some destination cities.

Destination	Departure Time	Arrival Time
Dubai	08 00	16 50
Singapore	07 55	10 00
Melbourne	17 40	01 10
Kuala Lumpur	20 30	22 48

Find the duration of each flight.

- Brunei to Dubai _____ h _____ min
- Brunei to Singapore _____ h _____ min
- Brunei to Melbourne _____ h _____ min
- Brunei to Kuala Lumpur _____ h _____ min