





# LIFE INTERNATIONAL SCHOOL

## QUARTER 1 EXAM IN SCIENCE

Grade 1B

Name: \_\_\_\_\_ Date: \_\_\_\_\_ Score: \_\_\_\_ / 35

**A. Arrange the rumble piece of picture into a Flower. (4 points)**




**B. What do plants need to grow? Matching type. (4 points)**



sun



air











soil







water

C. Match the pictures of different types of plant by listening to audio. (4 points)

	bushes 
	tree 
	grass 
	flower 

D. Arrange the plant life cycle. (4 points)



 1	 2
 3	 4

E. Matching type. Connect the body part on its name (5 points)

### At the farm



wings

teeth

feet

feathers

ears

F. Find which group does the animals belong. (6 points)



Insects		
Amphibians		
Mammals		
Fish		
Reptiles		
Birds		

G. Drag the pictures which group it belongs at. ( 8 points)

living	non-living



Great Job, you did it!

Jesus Loves You!