



Unit 3: Shapes

Revision of unit 3



- Recognize and name 2D shapes.
- Recognize and name points and line segments
- Name the shapes of objects around us.

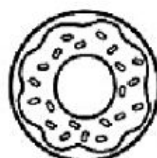
1. Match. (Nối)



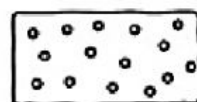
•



•



•



•

•
Triangle

•
Circle

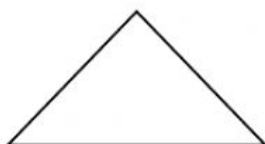
•
Rectangle

•
Square

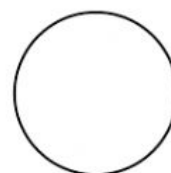
2. How many sides are there? (Có bao nhiêu cạnh?)



_____ sides



_____ sides



_____ sides

3. How many triangles are there?

(Có bao nhiêu hình tam giác)

Answer: _____ triangles.

