

Write the number that is squared and the square number for each of these diagrams.




Number Squared: 1

Square Number: 1




Number Squared: _____

Square Number: _____




Number Squared: _____

Square Number: _____




Number Squared: _____

Square Number: _____




Number Squared: _____

Square Number: _____




Number Squared: _____

Square Number: _____




Number Squared: _____

Square Number: _____



Number Squared: _____

Square Number: _____



Number Squared: _____

Square Number: _____