



Name: _____

Subtraction

Circle word to name the underlined sign or number.

<p>1. $9 \pm 1 = 10$</p> <p>plus sign equal sign minus sign</p>	<p>2. $12 - 2 = \underline{10}$</p> <p>addend sum difference</p>
--	---

Write a **subtraction** sentence for each picture.

<p>3. </p> <p>_____ ○ _____ = _____</p>	<p>4. </p> <p>_____ ○ _____ = _____</p>
---	---

Fill in the blanks.

5. _____ minus 5 equals 4.

6. 9 minus _____ equals 1.

7. 6 minus _____ equals 3.

8. _____ minus 8 equals 2.

9. Circle the correct answer.

Lisa picks 10 flowers.

Then she gives 3 flowers to her friend.

How many flowers does Lisa have left?

A. 6 flowers

B. 7 flowers

C. 13 flowers



10. Solve the problem.

There are 12 pencils.

Take away 4 pencils.

How many pencils are left over?



• *Find?*

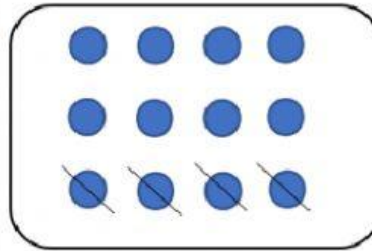
How many pencils
are left over?

• *Know?*

_____ pencils

_____ pencils

• *Draw the model.*



• *Write the number sentence.*

_____ ○ _____ = _____

• *Write the answer.*

There are _____ pencils left over.