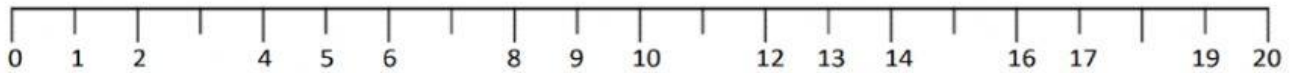


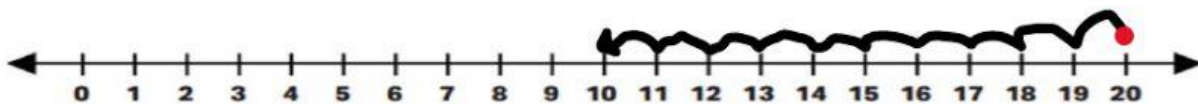
Name: _____

Date: Thursday, September 23, 2021

1) Count forward to 20 by filling in the missing numbers.

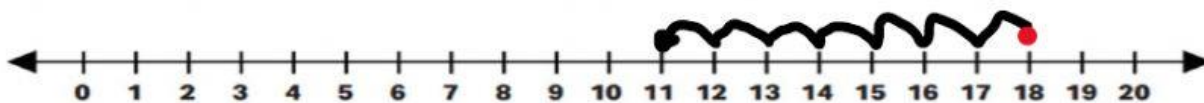


2) Which answer shows counting backward from 20 to 10?



- a) 20, 18, 16, 14, 10
- b) 20, 19, 18, 17, 16, 15, 14, 13, 12, 11, 10
- c) 20, 19, 17, 15, 18, 12

3) Which answer shows counting backward from 18 to 11?



- a) 18, 17, 16, 15, 14, 13, 12, 11
- b) 19, 18, 17, 16, 15, 14, 13, 12, 11, 10
- c) 18, 17, 15, 18, 12

4) Count backward to fill in the missing numbers.

a) 20 , , 18 , , 16 , , 14 , 13 , ,

b) 19 , , 17 , 16 , ,