

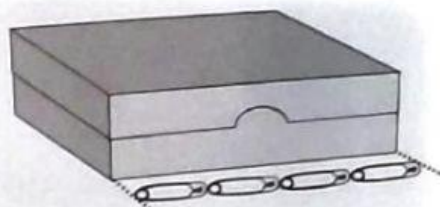


MEASURE AND COMPARE THE LENGTH OF OBJECTS

Activity I

Fill in the blanks.

a



The length of the box is equal to

4




b




The width of the book is



c




The height of the jar is



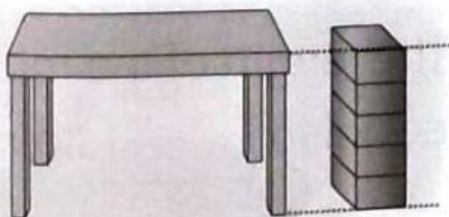
d



The length of the straw is



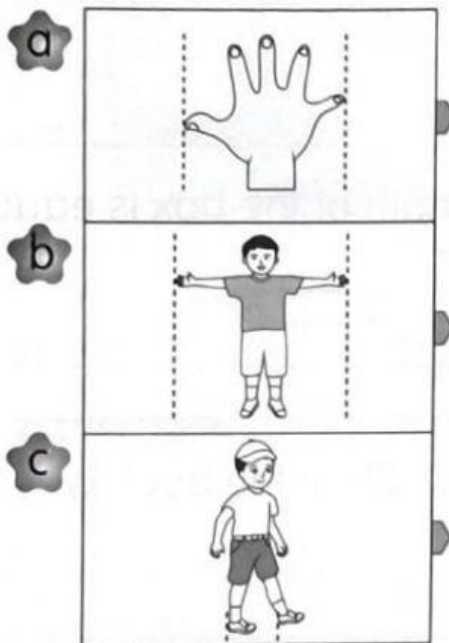
e



The height of the table is equal to boxes.

Activity 2

1 Match.




arm span


step

hand span


2 Fill in the blanks.



The length of the cupboard is equal to arm spans.



The length of the straw is equal to hand spans.



The length of the mat is equal to steps.