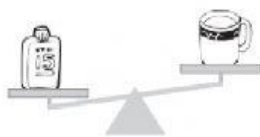


Mathematics

Measuring Mass

Circle the correct word



heavier

lighter

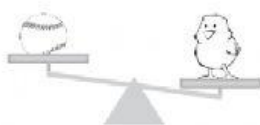
The bottle is _____ than the mug



heavier

lighter

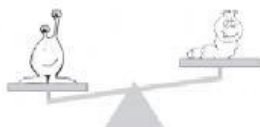
The apple is _____ than the bottle



heavier

lighter

The ball is _____ than the chick



heavier

lighter

The alien is _____ than the worm

Mathematics

Thermometer

What is the reading on each Thermometer?

