




Faces, Edges & Vertices

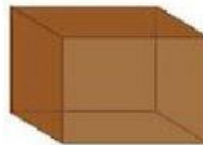
Write number of faces, edges, and vertices for following shapes

1)



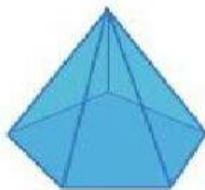
Faces
Edges
Vertices

2)



Faces
Edges
Vertices

3)



Faces
Edges
Vertices

4)



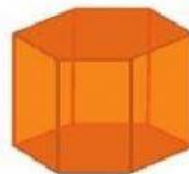
Faces
Edges
Vertices

5)



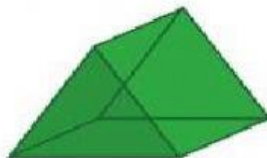
Faces
Edges
Vertices

6)



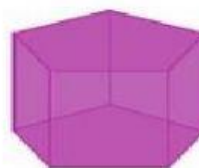
Faces
Edges
Vertices

7)



Faces
Edges
Vertices

8)



Faces
Edges
Vertices