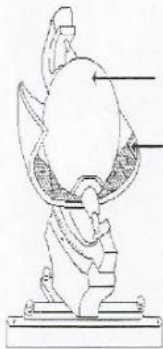


Instructions: 1. You will write your name at the end when you press FINISH to submit your assignment.

Read and Study your notes on weather instruments then complete this assignment for a grade.

ANSWERS MUST BE **SPELT (SPELLING) - CORRECTLY TO BE MARKED FOR POINTS OR MARKED CORRECTLY.**

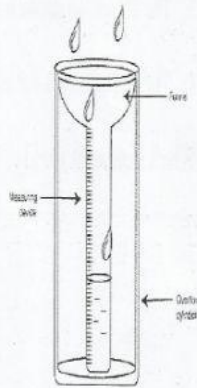
I. Label the weather instruments below.



a. _____




b. _____



c. _____



d. _____



e. _____

II. Write the letter of the correct weather instrument in Column B next to the weather element it records or measures in Column A.

Column A	Column B
1. Humidity	A. Thermometer
2. Sunshine	B. Symbols
3. Cloud Cover	C. Anemometer
4. Wind Direction	D. Wind Vane
5. Wind Speed	E. Rain Gauge
6. Rainfall	F. Hydrometer
7. Temperature	G. Barometer
8. Atmospheric Pressure	H. Sunshine Recorder

Answer Box

WORDS TO USE FOR NAMES OF Instruments ...

Remember to spell / copy correctly

- Wind Vane
- Thermometer
- Sunshine Recorder
- Hydrometer
- Anemometer

Don't Forget to copy the spelling Correctly