







REVIEW FOR SHORT TEST

Student: _____

1. Complete the sentences with the words from box.

solid – liquid – gas		
FREEZE	MELTS	BOILS
When you freeze water, it becomes a _____.	When ice melts , it becomes a _____.	When water boils , it becomes a _____.
		

2. Complete the chart about states of water.

water vapor – ice		
SOLID	LIQUID	GAS
Solid water is called _____.	Liquid water that what you drink.	Water in gas state is called _____.
		

3. Write "X" in the correct answer.

A. _____ is to **put different kinds of matter together**.

() matter

() melt

() mixture

B. **Solid water** is called _____.

() ice

() steam

() water

C. **Water in gas state** is called _____.

() ice

() liquid

() water vapor

D. _____ is what you drink.

() ice

() steam

() water