

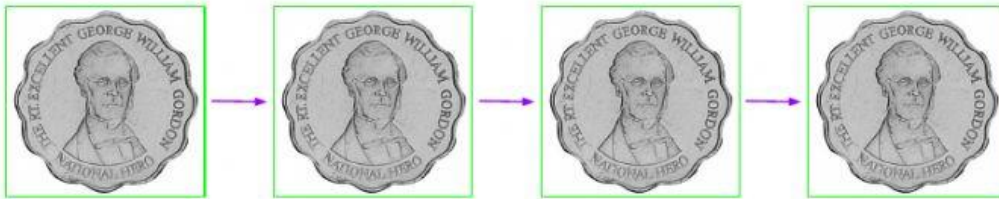


Money Practice #2

1. Count by tens to 100.

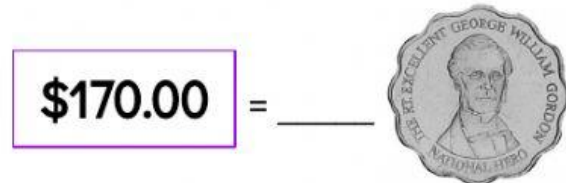
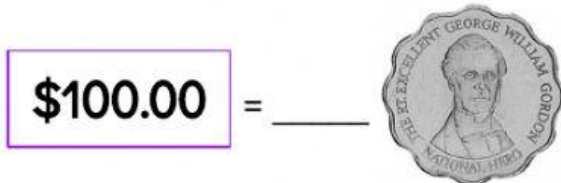
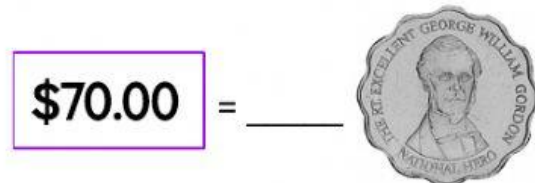
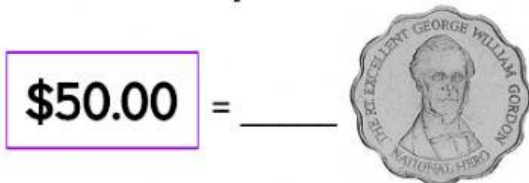
10									
----	--	--	--	--	--	--	--	--	--

2. How many dollars?



\$.	\$.	\$.	\$.
------	------	------	------

3. How many coins?



4. Sam went to the Tuck Shop. He got 4 mints and 2 candies.
How many things did he get in all?

	+		=	
--	---	--	---	--

The cost is \$60.

How many \$10 **coins** does he need? = _____



Jamaican Coins

Let's count! Then, tell if it's an odd or even amount.



\$10



\$1



\$.00



\$.00



\$.00



\$.00



\$.00



\$.00



\$.00



\$.00