

Name _____ Date _____

Perimeter of a Polygon

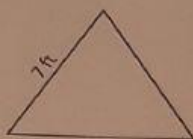
Find the perimeter of each regular polygon.

1)



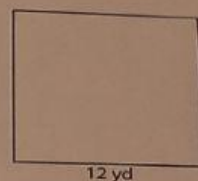
Perimeter = _____

2)



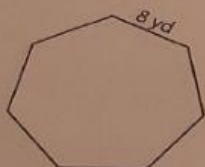
Perimeter = _____

3)



Perimeter = _____

4)



Perimeter = _____

5)



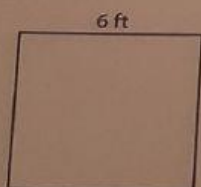
Perimeter = _____

6)



Perimeter = _____

7)



Perimeter = _____

8)



Perimeter = _____

9)



Perimeter = _____