

2D Shapes Properties

Answer the questions based on the instruction given.

1. Look at the picture below.

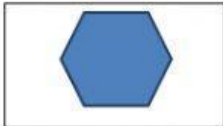


It is a _____.

It has _____ sides.

It has _____ vertices.


2. Match the pictures and their properties.



•

It has 3 sides and 3 angles, all the angles are not right angles.

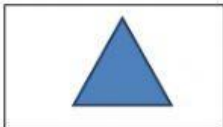
•



•

It has 5 vertices and 2 right angles.


•



•

It has 4 sides. All the angles are right angles.

•



•

It has 6 sides and 6 vertices.

•

3. Match the name of the shapes below with its properties.

It has 1 curved side and 1 straight side

•

It has 5 straight sides and 5 vertices

•

It has 3 straight sides and 3 vertices

•

It has 10 straight sides and 10 vertices

•

Triangle

Semicircle

Pentagon

Decagon