




Họ và tên:.....

Lớp:.....

# PHIẾU BÀI TẬP

Bài 1: Chọn số thích hợp:



5

4

3

Bài 2: Tính rồi nói kết quả bằng nhau:

$$1 + 2 + 3$$

$$1 + 2 + 1$$

$$2 + 0 + 2$$

$$0 + 2 + 3$$


$$2 + 2 + 1$$

$$1 + 0 + 5$$

Bài 3: Chọn đáp án đúng:


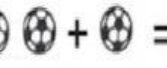
 +  =

 +  =

 =

 +  =

 +  =

 +  =

Bài 4: Tính:

$1 + 2 + 2 =$

$3 + 2 + 1 =$

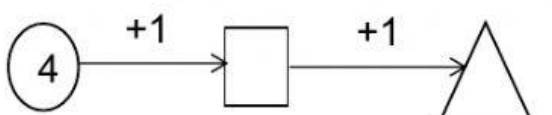
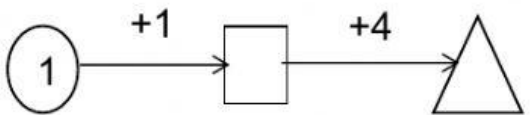
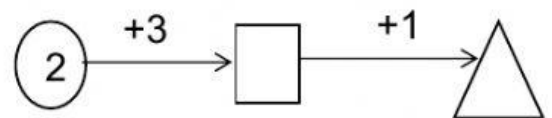
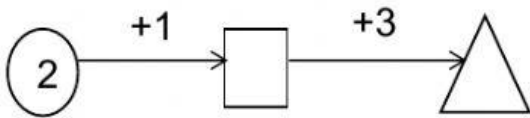
$0 + 1 + 3 =$

$2 + 0 + 3 =$

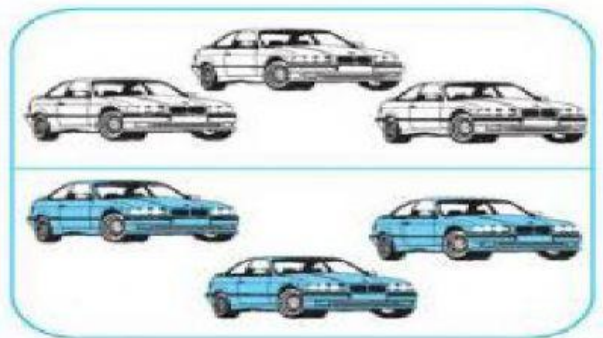

$2 + 2 + 2 =$

$2 + 1 + 1 =$

Bài 5: Tính:



Bài 6: Chọn phép tính đúng:



$4 + 2 = 6$

$3 + 3 = 6$