




















TIME

Matching Digital Clocks and Analog Clocks

Find the correct analog clock for each digital clock. Then put an **X** in the box next to the analog clock.

1.		<input type="checkbox"/> 	<input type="checkbox"/> 	<input type="checkbox"/> 
2.		<input type="checkbox"/> 	<input type="checkbox"/> 	<input type="checkbox"/> 
3.		<input type="checkbox"/> 	<input type="checkbox"/> 	<input type="checkbox"/> 
4.		<input type="checkbox"/> 	<input type="checkbox"/> 	<input type="checkbox"/> 
5.		<input type="checkbox"/> 	<input type="checkbox"/> 	<input type="checkbox"/> 