













Arrange in ascending order of capacity.




			1	
Bucket	Mug	Cup	2	
			3	




			1	
Cup	Bottle	Spoon	2	
			3	

			1	
Spoon	Pan	Bowl	2	
			3	

Arrange in descending order of capacity.

			1	
Jug	Bucket	Water tank	2	
			3	

			1	
Spoon	Pot	Tea pot	2	
			3	


			1	
Pan	Spoon	Bucket	2	
			3	

Choose the correct answer.

1. Which object is the shortest?



2. Which object is the longest?



3. Who is the tallest?



Mike



Sarah



Joey

- a. Sarah
- b. Mike
- c. Joey

4. Who is the shortest?



Tom



Ann



Ben

- a. Tom
- b. Ann
- c. Ben

5. Which object is the longest?



- a. Pencil
- b. Pen
- c. Ruler