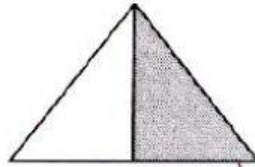




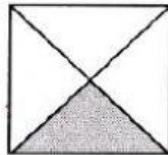
1. What fraction of each figure is **not** shaded?
Match the fractions to the correct figures.

one-half



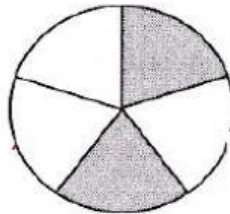
$\frac{2}{3}$

one-third



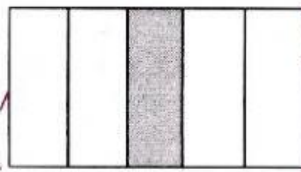
$\frac{3}{4}$

two-thirds



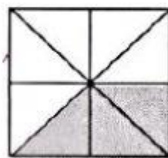
$\frac{1}{5}$

three-fourths



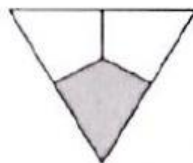
$\frac{5}{8}$

one-fifth



$\frac{1}{2}$

two-fifths



$\frac{4}{5}$

three-fifths

$\frac{1}{3}$

four-fifths

$\frac{2}{5}$

five-eighths

$\frac{3}{5}$