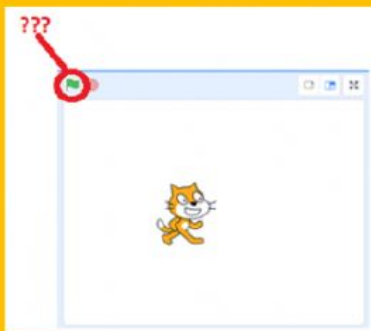


Q. What is the icon of Scratch programming?

— answer choices —



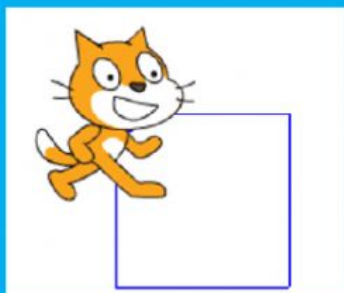
What does green flag do?

- A. Start
- B. Stop
- C. Finish
- D. Move



What does red flag do?

- A. Start
- B. Stop
- C. Finish
- D. Move




How many times do we need to repeat to draw the square?

(Write the number in the yellow box)

Which command should you use to slow down the program?

wait 1 secs

clear

when  clicked

change volume by -10

To start the program in Scratch, the first block is .....

move 100 steps

turn  15 degrees

wait 1 secs

when  clicked

Which block tells the Sprite to erase all the previous drawing?



erase all



pen down



pen up

when  clicked

when  clicked

repeat 5

say Hello!

How many times does this program say "Hello"?

(Write the number in the yellow box)

What does

turn  60 degrees

block do?

A. Turn right 60 degrees

B. Turn left 60 degrees

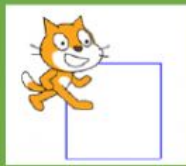
C. Turn upward 60 degrees

D. Turn downward 60 degrees


What can we draw from this program?



A




B



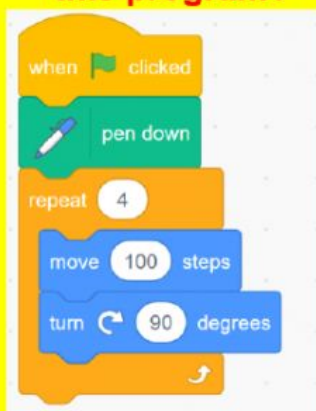
C




D



What can we draw from this program?



A




B



C



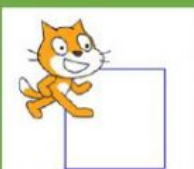
D




What can we draw from this program?



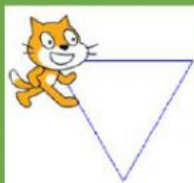
A



B



C



D

