
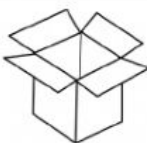








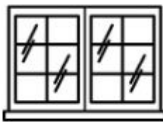



# SCIENCE [ASSIGNMENT 3]

Name - Last name	Nickname	No.	Class	Score
			P. 4 /	/10

**PART 1:** Look and write whether the given mediums are “transparent”, “translucent” or “opaque”. (10 points)

 transparent	 opaque	 _____	 _____
 _____	 _____	 _____	 _____
 _____	 _____	 _____	 _____

**PART 2:** Circle the correct answers (10 points).

Ex. There are [ three ★ four ] parts of flowers.

- Sepal, petal, stamen, and [ pistil ★ stem ] are parts of flowers.
- We use the [ balance ★ spring ] scale to measure mass of an object.
- The unit of mass of an object is [ kilogram ★ newton ].
- We use the [ balance ★ spring ] scale to measure weight of an object.
- The unit of weight of an object is [ kilogram ★ newton ].
- The short form of kilogram is [ kg ★ N ].
- The short form of newton is [ kg ★ N ].
- Gravitational force [ pushes ★ pulls ] anything to center of the Earth.
- When the [ weight ★ mass ] of an object is pulled, it is weight.
- The more mass an object has, the [ more ★ less ] gravity acts on it.