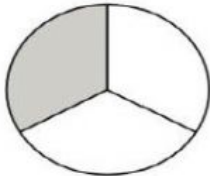
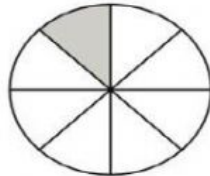
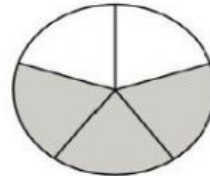
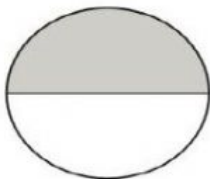
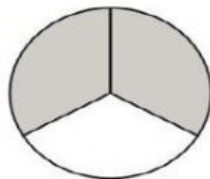
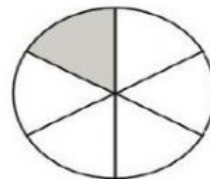
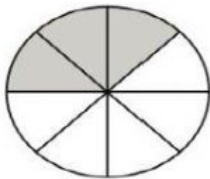
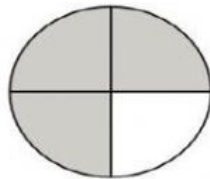
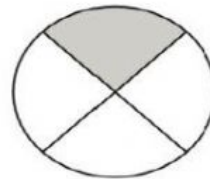


## Fraction of a Whole Check-in



Write the **shaded** fraction of each shape below.


$$\frac{\square}{\square}$$

$$\frac{\square}{\square}$$

$$\frac{\square}{\square}$$

$$\frac{\square}{\square}$$

$$\frac{\square}{\square}$$

$$\frac{\square}{\square}$$

$$\frac{\square}{\square}$$

$$\frac{\square}{\square}$$

$$\frac{\square}{\square}$$