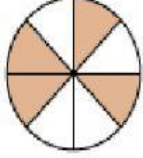
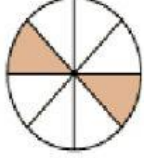

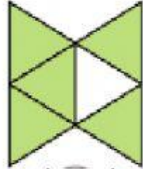
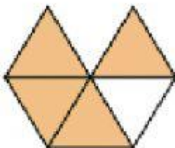
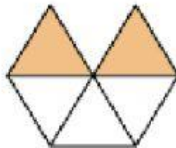



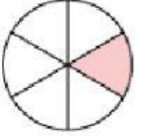
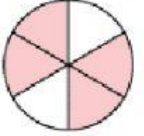
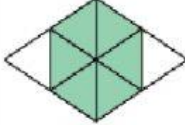
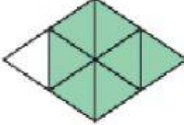
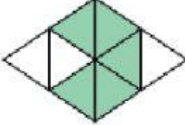


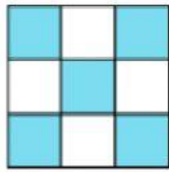
Look at the figures and CLICK at the fraction to choose the correct answer.

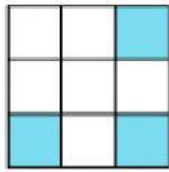
1) Which fraction is GREATER?

<p>a)</p> <div style="display: flex; justify-content: space-around; align-items: center;"> <div style="text-align: center;">  <div style="border: 1px solid black; padding: 5px; width: 40px; margin: 0 auto;">$\frac{4}{8}$</div> </div> <div style="text-align: center;">  <div style="border: 1px solid black; padding: 5px; width: 40px; margin: 0 auto;">$\frac{2}{8}$</div> </div> </div>	<p>b)</p> <div style="display: flex; justify-content: space-around; align-items: center;"> <div style="text-align: center;">  <div style="border: 1px solid black; padding: 5px; width: 40px; margin: 0 auto;">$\frac{3}{6}$</div> </div> <div style="text-align: center;">  <div style="border: 1px solid black; padding: 5px; width: 40px; margin: 0 auto;">$\frac{5}{6}$</div> </div> </div>
<p>c)</p> <div style="display: flex; justify-content: space-around; align-items: center;"> <div style="text-align: center;">  <div style="border: 1px solid black; padding: 5px; width: 40px; margin: 0 auto;">$\frac{4}{5}$</div> </div> <div style="text-align: center;">  <div style="border: 1px solid black; padding: 5px; width: 40px; margin: 0 auto;">$\frac{2}{5}$</div> </div> </div>	<p>d)</p> <div style="display: flex; justify-content: space-around; align-items: center;"> <div style="text-align: center;">  <div style="border: 1px solid black; padding: 5px; width: 40px; margin: 0 auto;">$\frac{4}{4}$</div> </div> <div style="text-align: center;">  <div style="border: 1px solid black; padding: 5px; width: 40px; margin: 0 auto;">$\frac{1}{4}$</div> </div> </div>
<p>e) Which fraction is the greatest?</p> <div style="display: flex; justify-content: space-around; align-items: center; margin-top: 10px;"> <div style="text-align: center;">  <div style="border: 1px solid black; padding: 5px; width: 40px; margin: 0 auto;">$\frac{2}{6}$</div> </div> <div style="text-align: center;">  <div style="border: 1px solid black; padding: 5px; width: 40px; margin: 0 auto;">$\frac{1}{6}$</div> </div> <div style="text-align: center;">  <div style="border: 1px solid black; padding: 5px; width: 40px; margin: 0 auto;">$\frac{4}{6}$</div> </div> </div>	<p>f) Which fraction is the greatest?</p> <div style="display: flex; justify-content: space-around; align-items: center; margin-top: 10px;"> <div style="text-align: center;">  <div style="border: 1px solid black; padding: 5px; width: 40px; margin: 0 auto;">$\frac{6}{8}$</div> </div> <div style="text-align: center;">  <div style="border: 1px solid black; padding: 5px; width: 40px; margin: 0 auto;">$\frac{7}{8}$</div> </div> <div style="text-align: center;">  <div style="border: 1px solid black; padding: 5px; width: 40px; margin: 0 auto;">$\frac{5}{8}$</div> </div> </div>

2) Which fraction is SMALLER?


a)

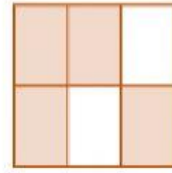


$$\frac{5}{9}$$


$$\frac{3}{9}$$

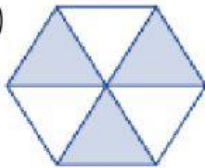
b)

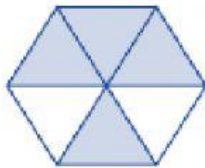


$$\frac{5}{6}$$


$$\frac{4}{6}$$

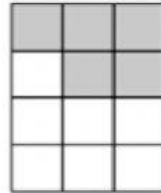
c)

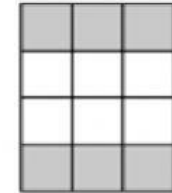


$$\frac{3}{6}$$


$$\frac{5}{6}$$

d)

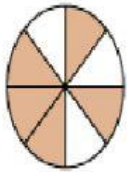


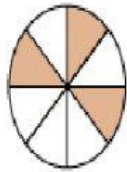
$$\frac{5}{12}$$


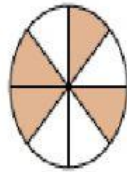
$$\frac{6}{12}$$

e)

Which fraction is the smallest?



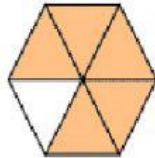
$$\frac{5}{8}$$


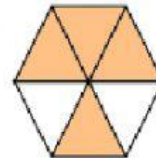
$$\frac{3}{8}$$


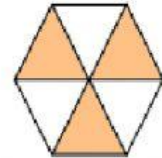
$$\frac{4}{8}$$

f)

Which fraction is the smallest?



$$\frac{5}{6}$$


$$\frac{4}{6}$$


$$\frac{3}{6}$$