

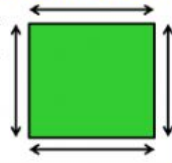
Name _____

Mathematics

Calculate the perimeter for each figure.

What is Perimeter?


The perimeter is the distance all the way around the outside of a 2D shape.



1.

14 cm

14 cm




14 cm

14 cm

Answer: $p =$ _____ cm

2.

18 m



18 m

12 m

Answer: $p =$ _____ m

3.

13 feet

19 feet

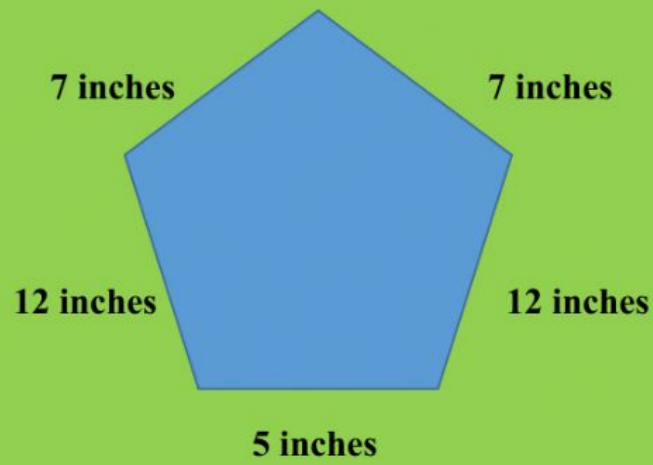


19 feet

21 feet

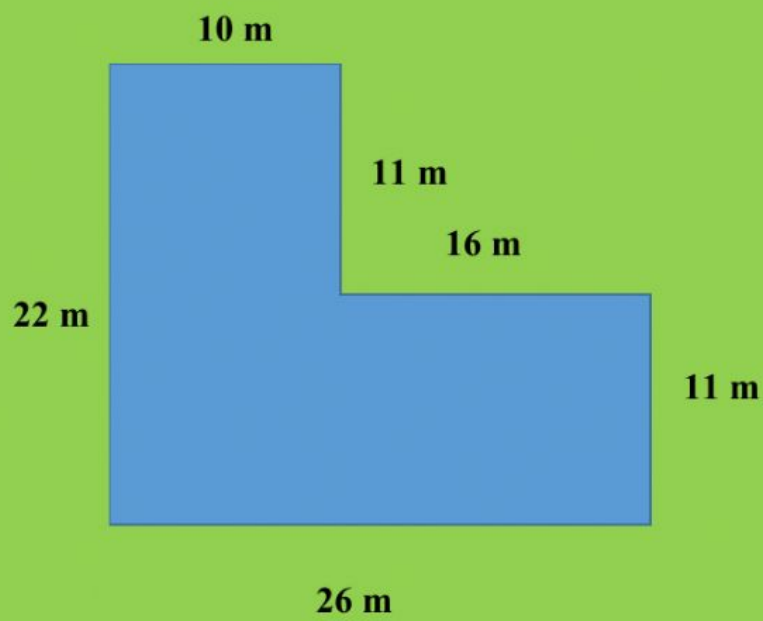
Answer: $p =$ _____ feet

4.



Answer: $p = \underline{\hspace{2cm}}$ inches

5.



Answer: $p = \underline{\hspace{2cm}}$ m