


# Tell the Time: Writing the Time

I can correctly tell the time to the half-hour. (ACMMG020)

Write the time shown on each clock.



\_\_\_\_ o'clock



\_\_\_\_ o'clock



\_\_\_\_ o'clock



\_\_\_\_ o'clock




\_\_\_\_ o'clock



\_\_\_\_ o'clock



\_\_\_\_ o'clock



\_\_\_\_ o'clock




\_\_\_\_ o'clock



\_\_\_\_ o'clock



\_\_\_\_ o'clock



\_\_\_\_ o'clock

# Tell the Time: Drawing the Time


Draw the time on each clock.



5 o'clock



11 o'clock




4 o'clock



9 o'clock



1 o'clock




10 o'clock



2 o'clock



6 o'clock




3 o'clock



8 o'clock



12 o'clock



7 o'clock