

NAME: \_\_\_\_\_


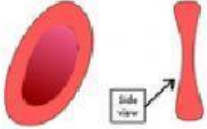


DATE: \_\_\_\_\_

## BLOOD

1. The liquid part of blood is called \_\_\_\_\_.
2. The solid parts of blood are: \_\_\_\_\_ and \_\_\_\_\_.
3. Write RED BLOOD CELL or WHITE BLOOD CELL in response to each statement below.
  - a. \_\_\_\_\_ fight any infection that might enter the body.
  - b. \_\_\_\_\_ contain a pigment called hemoglobin.
  - c. \_\_\_\_\_ transport oxygen around the body.
  - d. \_\_\_\_\_ may be phagocytes or lymphocytes
  - e. \_\_\_\_\_ some engulf germs and destroys them
  - f. \_\_\_\_\_ looks like a donut from above and the number 8 from the side
  - g. \_\_\_\_\_ some release antibodies to fight germs.

2. Look at the blood components below. Drag the name and function to the correct cell.

RED BLOOD CELL	ENGULF AND KILL GERMS	PLATELETS	MAKE AND SEND ANTIBODIES
HELP BLOOD CLOT	LYMPHOCYTES	PHAGOCYTE	TRANSPORT OXYGEN

				
NAME OF COMPONENT				
FUNCTION OF COMPONENT				