

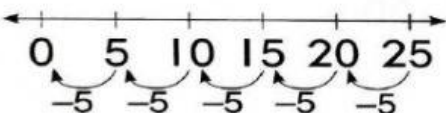
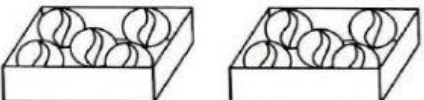
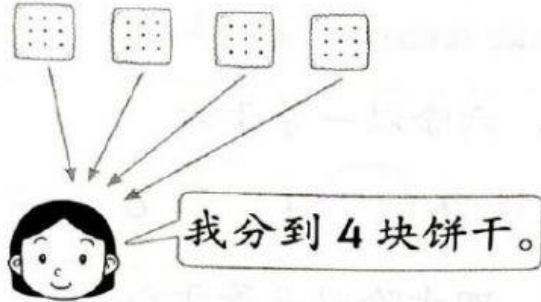
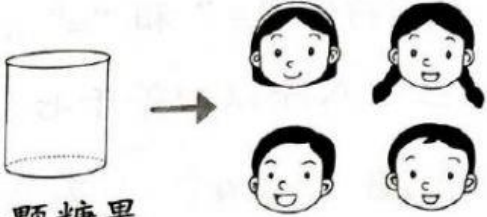




A 看图写出除法算式

<p>1. 把 12 片面包平分放进 4 个碟子，每碟有 3 片。</p> 	<p>2. 把 6 个鸡蛋两个两个地分组，可分成 3 组。</p> 
<p>3.</p> 	<p>4.</p>  <p>$\square \times 5 = 10$</p>

B 看图选出正确的算式

<p>1.</p> 	<p>2.</p>  <p>0 颗糖果</p>		
<p>$4 \div 1 = 4$</p>	<p>$4 \div 4 = 1$</p>	<p>$0 \div 4 = 0$</p>	<p>$4 \div 0 = 0$</p>
<p>3.</p>  <p>装成 1 盒</p>	<p>4.</p>  <p>0 块蛋糕</p>		
<p>$8 \div 8 = 1$</p>	<p>$8 \div 1 = 8$</p>	<p>$2 \div 0 = 0$</p>	<p>$0 \div 2 = 0$</p>

C. 写出正确的答案

1. $35 \div 5 =$

2. $10 \div 2 =$

3. $24 \div 4 =$

4. $80 \div$ $= 8$

5. $14 \div$ $= 7$

6. $36 \div$ $= 9$

7. $20 \div$ $= 4$

8. $\div 4 = 8$

9. $\div 10 = 5$

10. $\div 2 = 9$

D. 连一连

1 $6 \times 0 =$

10

6 $16 \div 4 =$

2 $3 \times$ $= 12$

4

7 $25 \div$ $= 5$

3 $\times 2 = 10$

0

8 $20 \div 10 =$

4 $10 \times 1 =$

2

9 $\div 1 = 10$

5 $\times 10 = 20$

5

10 $7 \div 0 =$