





## Mari Berlatih

Tentukan bilangan yang tepat untuk soal berikut!

1. 


+  +  +  +  =

... x ... = ...

2. 


+  +  +  =

... x ... = ...

3. 

+  =

... x ... = ...

4. 

+  +  =

... x ... = ...

Pasangkan dengan hasil perkaliannya!

$2 \times 4$	●	●	5
$1 \times 5$	●	●	16
$2 \times 8$	●	●	8
$1 \times 10$	●	●	9
$3 \times 3$	●	●	10
$2 \times 7$	●	●	14
$3 \times 2$	●	●	18
$2 \times 6$	●	●	15
$3 \times 5$	●	●	12
$2 \times 9$	●	●	6