






SCIENCE
LIVE WORK SHEET ENERGY

Name: _____ Section: Grade 2/ _____ Student Number: _____

Part 1:

Direction: Identify the following items if we use these at home or outside.

<p style="text-align: center;">1. television</p>  <p>Answer: _____</p>	<p style="text-align: center;">2. traffic lights</p>  <p>Answer: _____</p>
<p style="text-align: center;">3. trains</p>  <p>Answer: _____</p>	<p style="text-align: center;">4. microwave oven</p>  <p>Answer: _____</p>
<p style="text-align: center;">5. Car</p>  <p>Answer: _____</p>	<p style="text-align: center;">6. air conditioner</p>  <p>Answer: _____</p>