

Name: _____

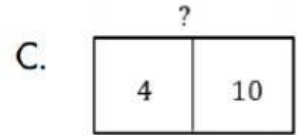
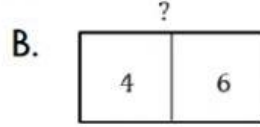
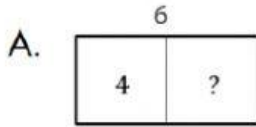
Addition Stories

1. Circle the correct answer.

Anna draws 4 red stars and 6 blue stars.

How many stars does she draw in all?

a. Which is the model of the problem?



b. Choose the number sentence to solve the problem.

A. $4 + 6 = 10$

B. $4 + 6 = 9$

C. $6 - 4 = 2$

c. Choose the right answer for the problem.

A. She draws 10 stars in all.

B. She draws 9 stars in all.

C. She has 2 stars left.

Solve the problems.

2. Mike has 5 fish in his tank. Then he has 7 more fish.

How many fish does Mike have in all?



• Find?

Fish

• Know?

fish

more fish

• Draw the model.



• Write the number sentence.

_____ + _____ = _____

• Write the answer.

Mike has _____ fish in all.

3. There are 7 red roses, 8 yellow roses, 3 white roses.

How many flowers are there in all?



• Find?

Flowers

• Know?

white roses

red roses

yellow

• Draw the model.



• Write the number sentence.

_____ + _____ + _____ = _____

• Write the answer.

There are _____ flowers in all.