



Worksheet – Numeracy



Write tens and ones for the following:



3 tens and 5 ones	
4 tens and 3 ones	



20 = _____ tens _____ ones	46 = _____ tens _____ ones
38 = _____ tens and _____ ones	22 = _____ tens _____ ones

Look at the pictures and write the tens and ones.

	
tens	ones

	
tens	ones

	
tens	ones

	
tens	ones