

Full Name :

Subject : Social Studies


Class :

Attendance number :

I. Choose the correct answer by click the option.

1. Beside man-made environment, there are ... environments.

- a. special b. natural c. original d. natural

2.  The picture shows a / an ... environment.

- a. natural c. beautiful
b. clean d. man-made

Town

3. The place where the seller and buyer meet is called a

- a. home b. garden c. market d. school

4. The function of the forest is producing

- a. carbondyoxide b. oxygen c. pollution d. poison

5. An environment which irrigating rice field is


- a. forest b. river c. mountain d. beach

6. An animal protected in the forest is

- a. worm b. chicken c. komodo d. cat

7. The overflowing water caused by heavy rain or many rubbishes in the river is ...

- a. landslide b. flood c. drought d. forest fire

8.  Conserving the air means preventing it from ...

- a. Pollution b. land c. poison d. forest

9. The way of conserving the "land" is to


- a. ride bicycle b. deforestation c. use less plastic d. bury plastic

10. The picture of big area is ...

- a. Plan b. map c. compass d. scale

11. If we want to know the direction from a place to another, we should look at ...

- a. Compass b. legend c. title d. scale

12.  The arrow is showing ... direction
 a. southeast b. southwest c. northwest d. northeast
13. 1: 1000.000 on a map is called ...
 a. Scale b. compass c. legend d. title
14. An example of provincial maps is a map of ...
 a. east java b. madura island c. indonesia d. sidoarjo
15. The symbol on a map called ...
 a. legend b. cardinal direction c. map title d. scale

II. Answer the questions below based on the instruction given.

16. Choose the correct functions of school.

17. Choose the correct examples of natural environment damages by human.

18. Classify some natural environments and man-made environments below, by dragging the words into the correct column.

Garden	Aquarium	Lake
Mountain	Sea	School

No	Natural Environment	Man-made Environment
a.		
b.		
c.		

19. Choose the right ways to conserve water

20. Choose the right direction depend on the following compass

Northeast	Southwest	Northwest
East	West	Southeast

