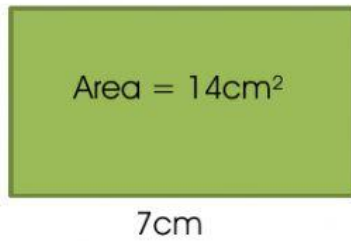


## AREA OF SQUARE AND RECTANGLE

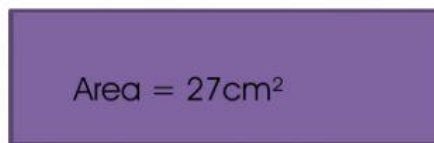
Find the missing length or breadth/width. (Each figure is not to scale)

1.



cm

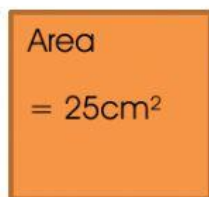
2.



3 cm

cm

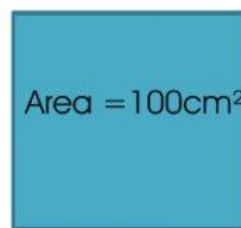
3.



5 cm

cm

4.



cm