

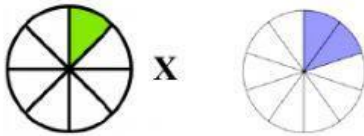
Name: _____

Date: _____

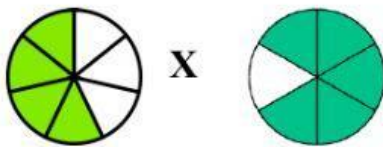
Mathematics Multiplying Fractions

Number Sentences

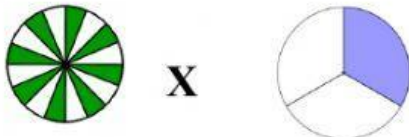
Based on the fraction bars/diagrams shown below, create a number sentence to match each diagram. Then solve each multiplication sentence.



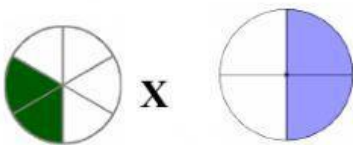
1. $\frac{1}{8} \times \frac{2}{8} = \frac{\quad}{\quad}$ Simplified = $\frac{\quad}{\quad}$



2. $\frac{4}{6} \times \frac{5}{6} = \frac{\quad}{\quad}$ Simplified = $\frac{\quad}{\quad}$



3. $\frac{4}{8} \times \frac{2}{3} = \frac{\quad}{\quad}$ Simplified = $\frac{\quad}{\quad}$



4. $\frac{2}{6} \times \frac{2}{4} = \frac{\quad}{\quad}$ Simplified = $\frac{\quad}{\quad}$

Created by: Ms. A. Bain