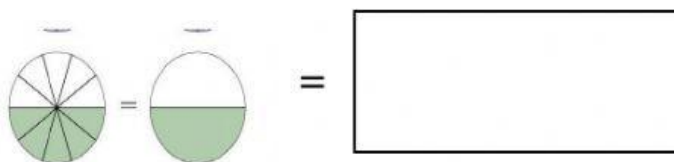
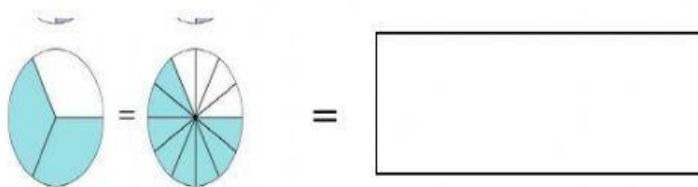

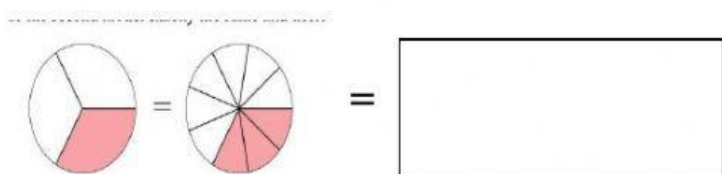


KENDRIYA VIDYALAYA NO.1 , SHAHIBAUG,AHMEDABAD
WORKSHEET

CLASS : 5

SUBJECT: MATHS

Place the correct equivalent fraction in front of picture.



$5/10 = 1/2$

$3/12 = 1/4$

$1/3 = 3/9$

$2/3 = 8/12$