



Sarasas Witaed Romklao School
Worksheet 4 : Mathematics
Grade 1

Name _____ Grade _____ No. _____

Part 1:
Addition

$$\begin{aligned} 1. & (10 + 3) + 6 \\ &= \boxed{} + 6 \\ &= \boxed{} \end{aligned}$$

$$\begin{aligned} 2. & 9 + (7 + 4) \\ &= 9 + \boxed{} \\ &= \boxed{} \end{aligned}$$

Subtraction







$$\begin{aligned} 3. & (10 - 4) - 5 \\ &= \boxed{} - 5 \\ &= \boxed{} \end{aligned}$$

$$\begin{aligned} 4. & (15 - 5) - 10 \\ &= \boxed{} - 10 \\ &= \boxed{} \end{aligned}$$







$$\begin{aligned} 5. & 20 - (4 - 3) \\ &= 20 - \boxed{} \\ &= \boxed{} \end{aligned}$$

Part 2:

Ascending Order (Start with the smallest and finish with the biggest).

1.   
2.   

Descending Order (Start with the biggest and finish with the smallest)

3.   
4.   
5. 