





REVIEW NUMBERS FROM 1 TO 5

Exercise 1. How many object in each group?

Điền vào ô trống số con vật trong mỗi nhóm?



Exercise 2. Match. Nối



1

3

5

2

4

Three

One

Four

Five

Two