




Place Value



Group of 10 and Extra Ones




___ Groups of 10 and ___ Extra Ones = ___





___ Groups of 10 and ___ Extra Ones = ___




___ Groups of 10 and ___ Extra Ones = ___



___ Groups of 10 and ___ Extra Ones = ___



___ Groups of 10 and ___ Extra Ones = ___



___ Groups of 10 and ___ Extra Ones = ___