



SARASAS WITAED BANGBON SCHOOL
MINI AND ASEAN PROGRAMME
SECONDARY 2
SUBJECT: MATHEMATICS
TOPIC: ROTATION

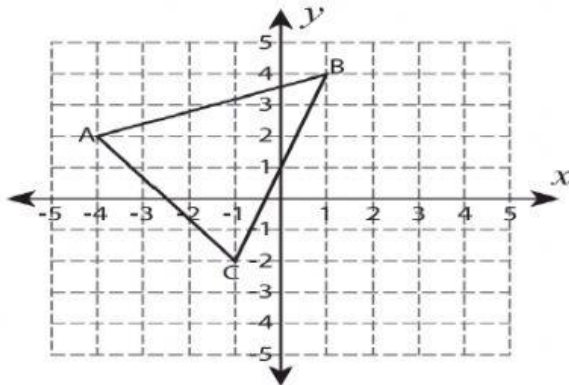
Name:

Class:

No:

Instructions: Write the coordinates of the image after rotating it about the origin.

1.) 90° clockwise rotation

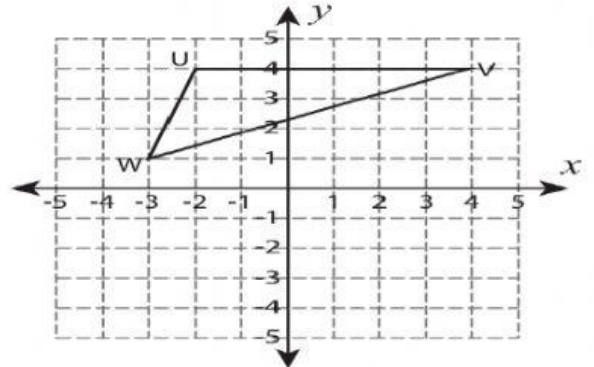


A'(__, __)

C'(__, __)

B'(__, __)

2.) 180° rotation

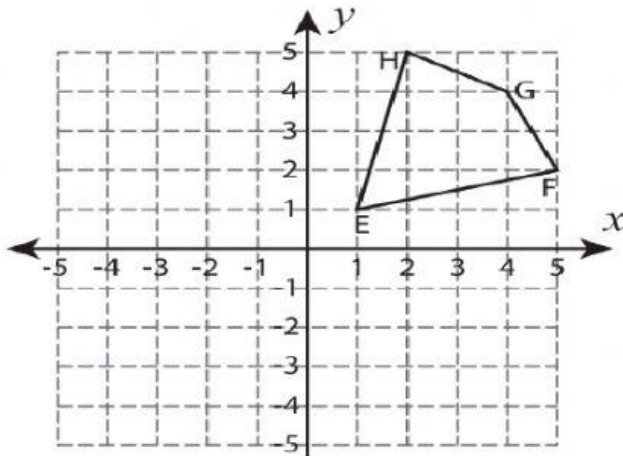


U'(__, __)

V'(__, __)

W'(__, __)

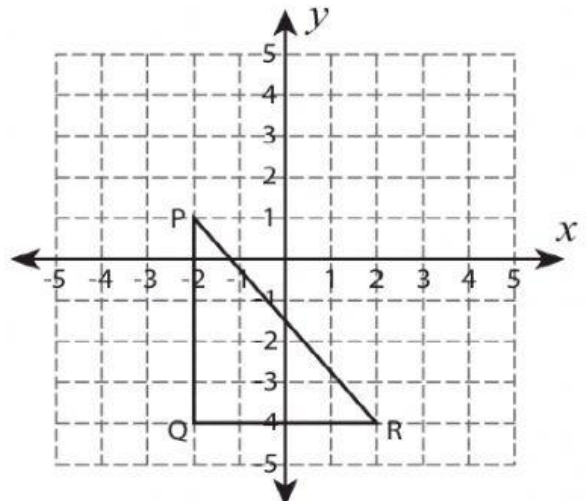
3.) 90° counterclockwise rotation



E'(__, __) **F'**(__, __)

G'(__, __) **H'**(__, __)

4.) 180° rotation



P'(__, __)

R'(__, __)

Q'(__, __)