

Name: \_\_\_\_\_

# Grade 1


## MEASURING LENGTH AND HEIGHT




**Instructions:** Count the paperclips to tell the length and the height of each picture.



\_\_\_\_\_ paperclips long



\_\_\_\_\_ paperclips long



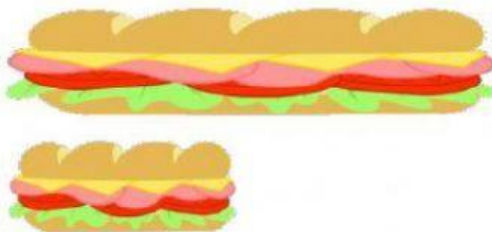
\_\_\_\_\_ paperclips high



\_\_\_\_\_ paperclips high

**Instructions:** Choose the correct answers.

5. Which sandwich is shorter?



6. Which tree is lower?



7. Which hotel is higher?



8. Which shoe is longer?





