

Name _____

Date _____

Year Group _____




Match the words to the correspond circle that best describes the red part

Circumference

Radius

Diameter

Center



1.

2.

3.

4.

Match the words to the correspond definition. There will be extra.

Circumference

Radius

Diameter

Center

Area

Radius

Diameter

Sector

5. The is the distance around the circle.

6. The is the point that is equidistant from the edge of the circle.

7. The is the length of the line from the center to the any point on the edge.

8. The is the length of the line that pass through the center and touches two points on the circle.

9. The is half the diameter.

10. The is two times the radius.

Extra 1

Extra 2