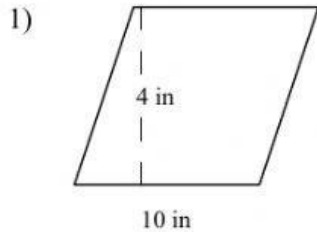


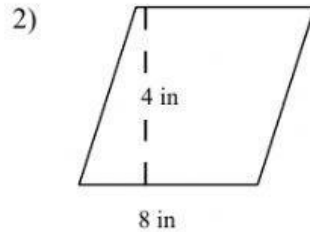
Name \_\_\_\_\_

### AREA OF A PARALLELOGRAM #1

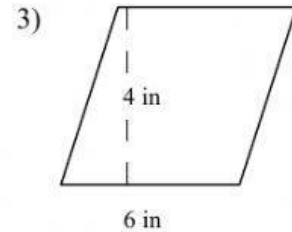
**Directions:** Find the area of parallelogram. The formula to calculate the area of a parallelogram is  $\text{Area} = \text{the width of the base} \times \text{the vertical height}$ . Write your answer in the space provided



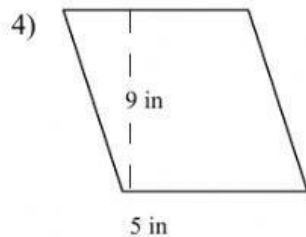
Area \_\_\_\_\_



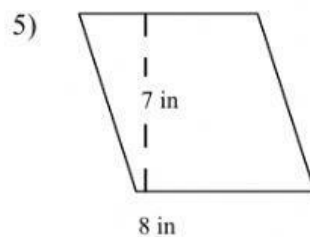
Area \_\_\_\_\_



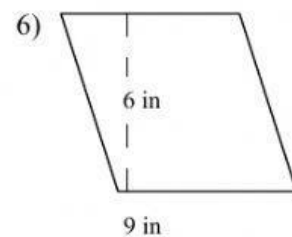
Area \_\_\_\_\_



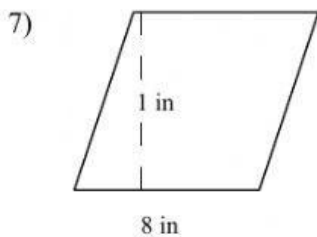
Area \_\_\_\_\_



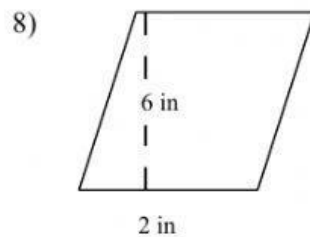
Area \_\_\_\_\_



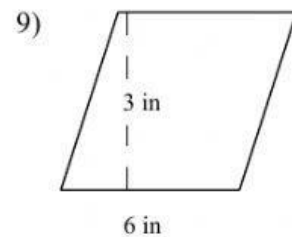
Area \_\_\_\_\_



Area \_\_\_\_\_



Area \_\_\_\_\_



Area \_\_\_\_\_