

Name _____

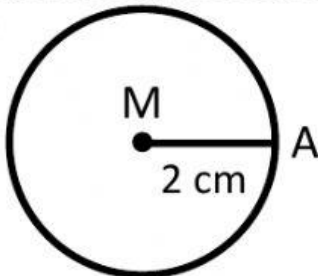
Date _____

Year Group _____

Find the area of the given circle

Please put the simplified version and the number rounded to the nearest hundredth

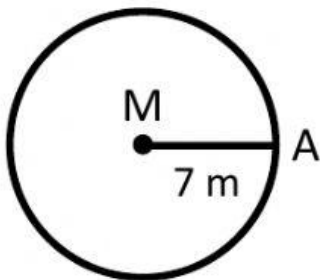
1.



Answer = _____ π cm^2

Rounded Answer = _____ cm^2

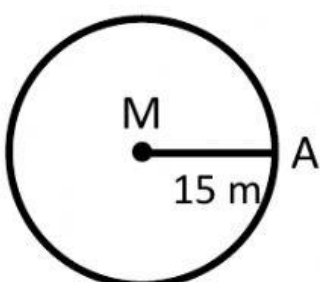
2.



Answer = _____ π cm^2

Rounded Answer = _____ cm^2

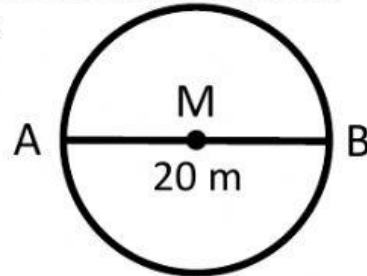
3.



Answer = _____ π cm^2

Rounded Answer = _____ cm^2

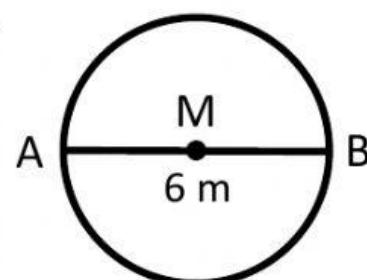
4.



Answer = _____ π cm^2

Rounded Answer = _____ cm^2

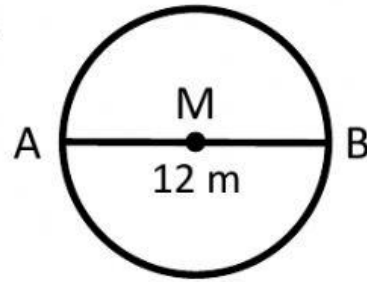
5.



Answer = _____ π cm^2

Rounded Answer = _____ cm^2

6.



Answer = _____ π cm^2

Rounded Answer = _____ cm^2