



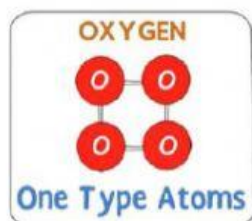
**Assumption College Ubonratchathani**  
**English for Science 1**

Name \_\_\_\_\_ Class \_\_\_\_\_ No \_\_\_\_\_

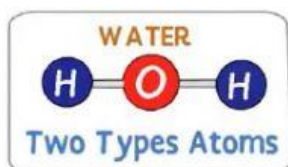
**Elements versus Compounds**

**Instruction:** *Supply the correct answer.*

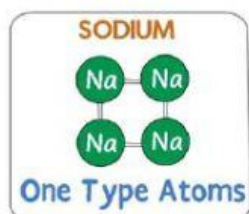
1. An element is made of how many types of atom?  
A. 1 type of atom                      B. 2 types of atoms                      C. 3 or more types of atoms
2. A compound is made of how many types of atom?  
A. 1 type of atom                      B. more than 1 type of atoms
3. Is the molecule of oxygen an element or compound?  
A. element                      B. compound



4. Is the molecule of water an element or compound?  
A. It is an element.                      B. It is a compound.



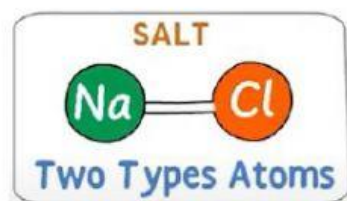
5. Is the molecule of sodium an element or compound?  
A. It is an element.                      B. It is a compound.



6. Is the molecule of salt an element or compound?

A. It is an element.

B. It is a compound.



7. Is the molecule of sugar an element or compound?

A. It is an element.

B. It is a compound.



8. What is the symbol of Oxygen?

Answer:



9. What is the symbol of Hydrogen?

Answer:



10. What is the symbol of Gold?

Answer:

