
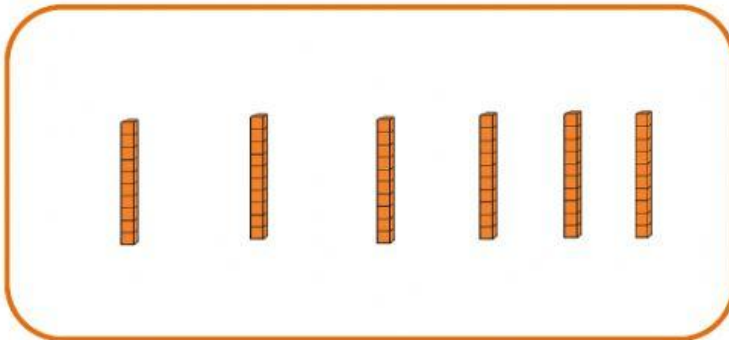
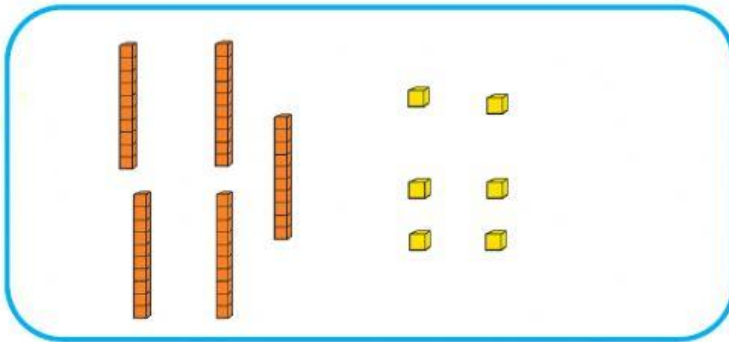


Escribe en números las siguientes cantidades que indican la base 10.



Escribe en letras las siguientes cantidades.

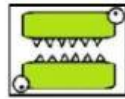


97 _____

65 _____

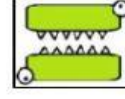

12 _____

Arrastra los símbolos de mayor que, menor que o igual (<, > ó =) según corresponda.



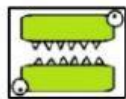
12		45
----	--	----





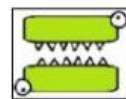
34		21
----	--	----



20		20
----	--	----



5		10
---	--	----



Realiza las siguientes sumas

	d	u
	5	3
+	3	1
	0	2
	<hr/>	

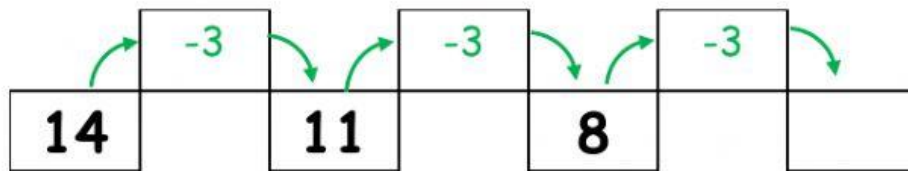
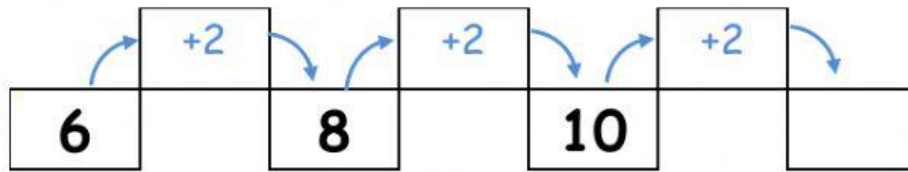
	d	u
	4	5
+	4	0
	<hr/>	

Realiza las siguientes restas

	d	u
	6	0
-	0	0
	<hr/>	

	d	u
	5	7
-	4	3
	<hr/>	

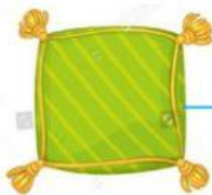
Complete la siguiente secuencia de números.



Relaciona la forma de la figura con su respectivo nombre.



Círculo



Triángulo



Cuadrado



Rectángulo