

NAME: _____

DATE: _____

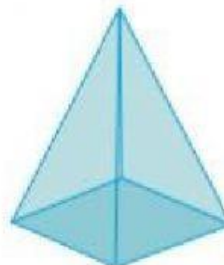
MORE 3 DIMENSIONAL SHAPES!

Identify the solid shapes choosing their names from the word box.

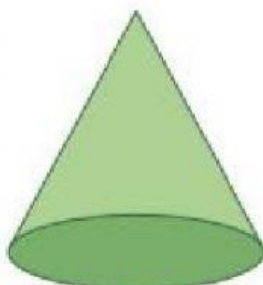
1)



2)



3)



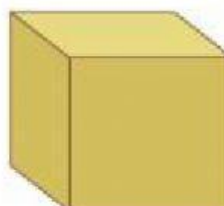
4)



5)



6)



cylinder

cone

pyramid

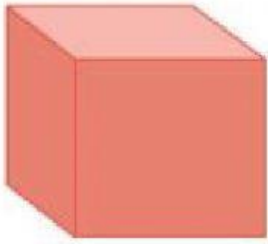
sphere

rectangular prism

cube

Identify each 3D shape


1)



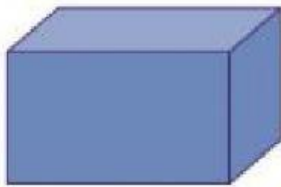
2)



3)



4)



5)



6)

