
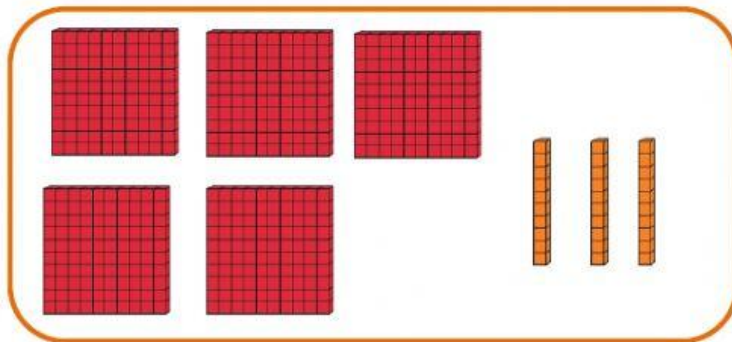
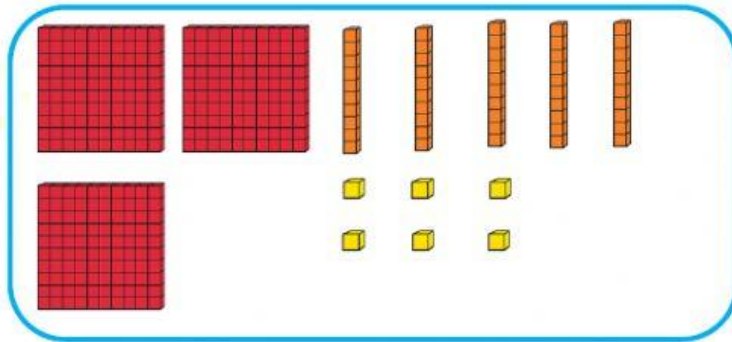


Escribe en números las siguientes cantidades que indican la base 10.



Escribe en letras las siguientes cantidades.

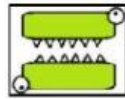

97 _____

65 _____

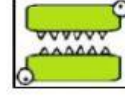
12 _____

Arrastra los símbolos de mayor que, menor que o igual (<, > ó =) según corresponda.




12		45
----	--	----





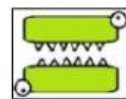
34		21
----	--	----



203		203
-----	--	-----



5		100
---	--	-----



Realiza las siguientes sumas

	c	d	u
	2	5	3
+	1	3	1
	6	0	2

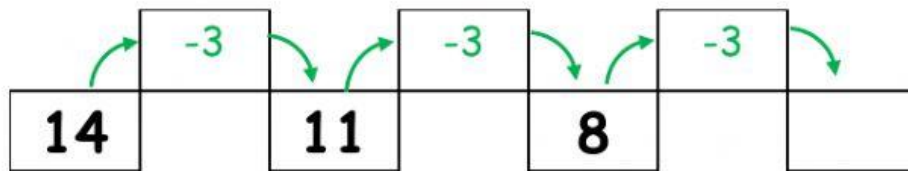
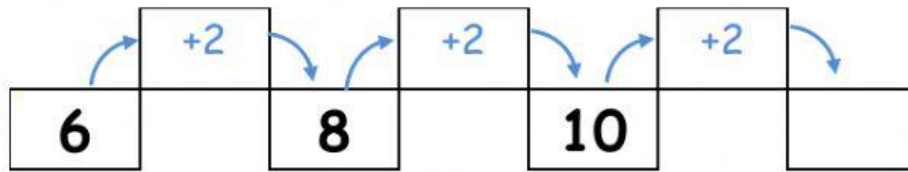
	c	d	u
	3	4	5
+	2	4	0

Realiza las siguientes restas

	c	d	u
	5	6	0
-	2	0	0

	c	d	u
	4	5	7
-	1	4	3

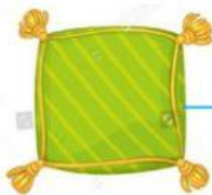
Complete la siguiente secuencia de números.



Relaciona la forma de la figura con su respectivo nombre.



Círculo



Triángulo



Cuadrado



Rectángulo