

Nama : _____

Hari : _____

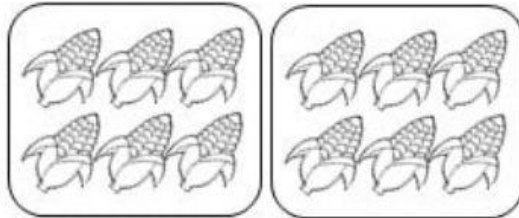
Kelas : _____

Tarikh : _____


UNIT 4: OPERASI DARAB

E. Lengkapi ayat matematik yang berikut dengan tambah berulang.


Contoh:




$$6 + 6 = 12$$



$$\square + \square + \square = \square$$



$$\square + \square + \square + \square = \square$$



$$\square + \square + \square + \square + \square = \square$$