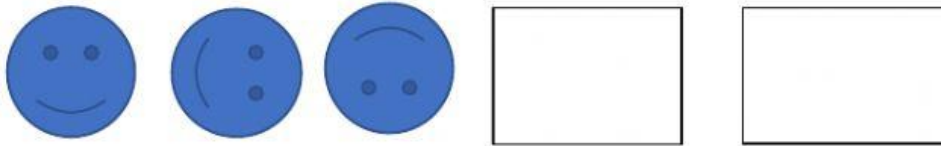



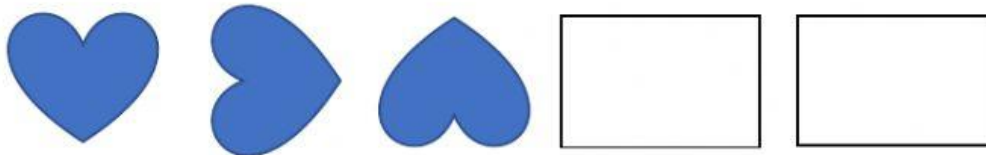
Name of the Student: Section.....

Complete the following patterns by dragging from the box below: -

1.



2.



Fill the square using all the numbers from 46 to 54.

Rule: The total of each line is 150.

		49
46		
	52	47